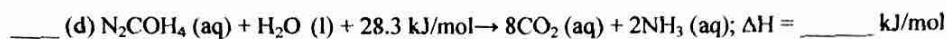
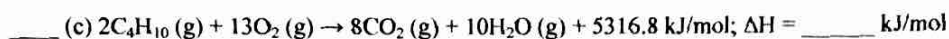
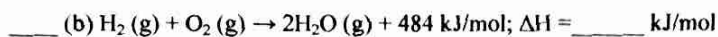
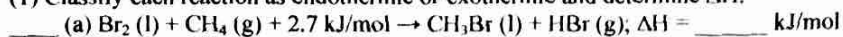


Name: _____
Period: _____

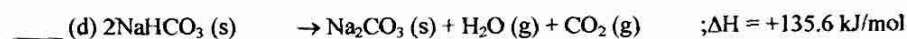
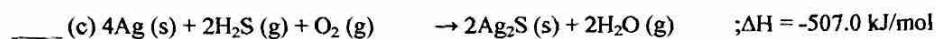
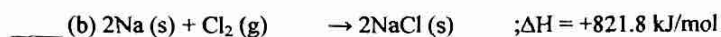
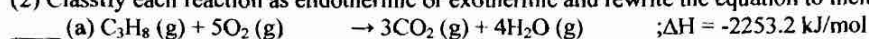
Heats of Reactions

PRACTICE SHEET #48

(1) Classify each reaction as endothermic or exothermic and determine ΔH .



(2) Classify each reaction as endothermic or exothermic and rewrite the equation to include ΔH .



(3) Use the heats of formation to calculate the heat of the reaction.

